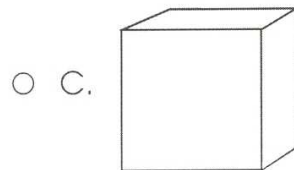
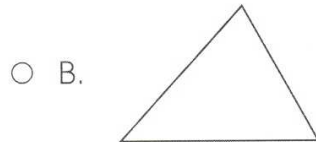
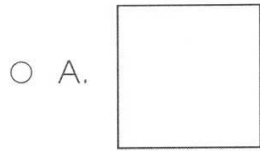


28. Which shape is three-dimensional?



29. What coins could you receive for change if you use a \$1.00 bill to pay for something that costs \$0.59?

